

























Reading Pictographs (A)

Answer the questions about the pictograph.

Number of School Buses at Schools in Great Line School District

B. Pascal P.S.	      
Euclid P.S.	    
Central P.S.	 
North Central P.S.	     
M.C. Escher P.S.	  

 = 2 buses

1. Which school has the most buses? How many?
2. Which school has the fewest buses? How many?
3. How many buses are there all together at all the schools?
4. How many more buses does North Central P.S. have than M.C. Escher P.S.?
5. If North Central P.S. added two buses, they would have the same number of buses as what other school?